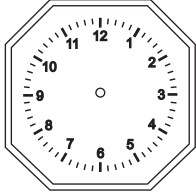


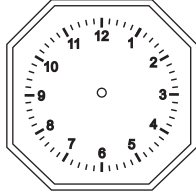
# Worksheets

## Worksheet 1

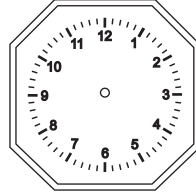
1. Draw the hands of the clock to show the following times.



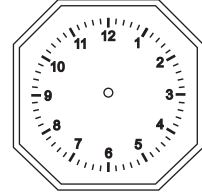
a. 9 o'clock



b. 3 o'clock



c. 12 o'clock



d. 6 o'clock

2. Match the activity with the time by drawing arrows.

- |                  |                 |
|------------------|-----------------|
| a. Wake up time  | (i) 1 o'clock   |
| b. School time   | (ii) 9 o'clock  |
| c. Lunch time    | (iii) 5 o'clock |
| d. Homework time | (iv) 8 o'clock  |
| e. Bed time      | (v) 6 o'clock   |

3. Unscramble the following days of the week and write them in order.

WDEYADSEN, YADUSN, AYDNOM, YDATSEU, TASURYAD, RIFDYA, YATUHRSD


- |         |         |
|---------|---------|
| a. .... | b. .... |
| c. .... | d. .... |
| e. .... | f. .... |
| g. .... |         |

4. Fill in the blanks with the months of the year.

- |   |       |
|---|-------|
| a. This month begins with the letter 'O'.                 | ..... |
| b. Christmas is celebrated in this month.                 | ..... |
| c. This is the first month of the year.                   | ..... |
| d. This is the fifth month of the year.                   | ..... |
| e. This month has 30 days and starts with the letter 'N'. | ..... |
| f. This month comes after June.                           | ..... |
| g. Independence Day is in this month.                     | ..... |
| h. This month has the least number of days.               | ..... |
| i. It has 31 days and begins with 'M'.                    | ..... |
| j. This month comes before May.                           | ..... |

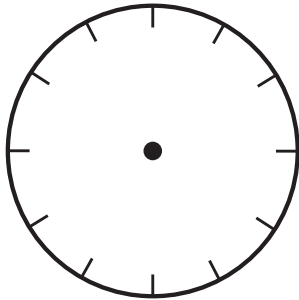
5. Write the approximate time.

- a. It is .....  
(night time/morning)
- b. This is the time to .....  
(eat breakfast/sleep)
- c. It is .....  
(2 o'clock/7 o'clock)



## Worksheet 2

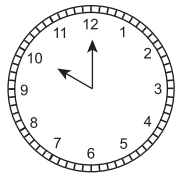
- Write the numbers on the face of the clock. Draw the hour hand in red and the minute hand in blue. Label them.



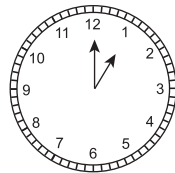
- On the outline calendar page, fill in the current month, year, days of the week and dates.

<input style="width: 100%; height: 20px;" type="text"/>						

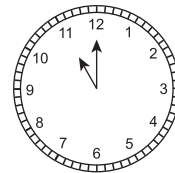
- Fill in the time shown on the clock.



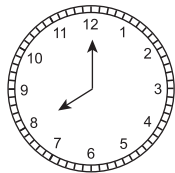
a. .... o'clock



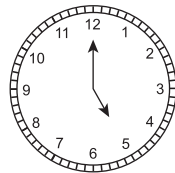
b. .... o'clock



c. .... o'clock



d. .... o'clock



e. .... o'clock

- Arrange according to the correct sequence of events.

- Munni gets dressed for school. ....
- Munni brushes her teeth. ....
- Munni has a bath. ....
- Munni eats her breakfast. ....
- Munni puts toothpaste on her toothbrush. ....

5. Say whether the following statements are true 'T' or false 'F'.
- a. The sun rises at 5 o'clock in the evening. ....
  - b. The sun is highest in the sky at noon. ....
  - c. The time before night is called evening. ....
  - d. Children play in the park in the evening. ....
  - e. Children go to bed in the morning. ....
6. Unscramble the letters to form the months of the year and write them in the proper order: YAM, TESEPMERB, UNEJ, GSUTAU, TOBRECO
- .....
- .....

### Answers to Worksheet 1

- 2. a. (v)                      b. (iv)                      c. (i)                      d. (iii)                      e. (ii)
- 3. a. Monday                b. Tuesday                c. Wednesday
- d. Thursday              e. Friday                  f. Saturday              g. Sunday
- 4. a. October                b. December              c. January                d. May                      e. November
- f. July                      g. August                  h. February                i. March, May            j. April
- 5. a. night time            b. sleep                    c. 2 o'clock

### Answers to Worksheet 2

- 3. a. 10 o'clock    b. 1 o'clock    c. 11 o'clock    d. 8 o'clock    e. 5 o'clock
- 4. (e) (b) (c) (a) (d)
- 5. a. F                      b. T                      c. T                      d. T                      e. F
- 6. MAY, JUNE, AUGUST, SEPTEMBER, OCTOBER