






Q1. Read the clock and match the time:

| | |
|--|-------------|
|  | 7 o' clock |
|  | 9 o' clock |
|  | 12 o' clock |

Q2. Fill in the blank with the correct time:


If the hour hand is at 3, and the minute hand is at 12, the time is _____.

Q3. Tick the statements that appear correct and cross out the ones that appear wrong:

- Ramesh went to the market at 5 o' clock in the morning.
- On holidays, Swati eats her breakfast at 9 o' clock in the morning.
- Raju comes back from school at 3 o' clock in the afternoon.
- Shreya eats dinner at 6 o' clock in the evening.

Q4. Draw the hands of the clock to show the time.

11 o' clock



Q5. Rearrange the jumbled words to form names of months:

- a. AAJNRYU : _____
- b. YLUJ : _____
- c. GUAUTS : _____
- d. ENUJ : _____

Q6. Circle the months that have 30 days.

| | | | |
|---------|-----------|----------|-------|
| January | February | March | April |
| May | September | December | |

Q7. Fill in the blanks:

- a. There are _____ months in a year.
- b. There are _____ days in a week.
- c. January has _____ days.
- d. There are _____ days in a year.

Q8. In the year 2016, February had 29 days. Why?

Answer: _____

Q9. Fill in the names of the missing months:

January, _____, _____, April, _____, _____, July,
August, _____, _____, _____, December

Q10. Match the following:

| | |
|-----------------------------------|-----------|
| Last month of the year | September |
| Month after June | February |
| Month having least number of days | January |
| Month before October | July |
| First month of the year | December |

Q11. Tick the correct option. For which of the following denominations there is no coin?

- a. ₹5
- b. ₹50
- c. ₹10

Q12. Circle the coin or note which is no longer in use.



Q13. Tick the correct option

What can Rohan buy if he has a ₹10 note ?

- a. 20 pencils
- b. 10 pencils
- c. 2 pencils

Q14. Choose the correct option:

Rajat has to submit his notebook on Tuesday. So he has to finish his work by _____.




- a. Wednesday
- b. Thursday
- c. Monday

Q15. Complete the sentence by filling in the correct name of the week day.

Rohit was not well so he was absent on Tuesday. He went to school the next day. He went to school on _____.

ANSWERS

1.

| | |
|---|-------------|
|  | 12 o' clock |
|  | 7 o' clock |
|  | 9 o' clock |

2. 3 o' clock

3. a. x b. c. d. x

4.



5. a. JANUARY b. JULY c. AUGUST d. JUNE

6.

| | | | |
|---------|-----------|----------|-------|
| January | February | March | April |
| May | September | December | |

7. a. 12 b. 7 c. 31 d. 365

8. 2016 was a leap year.

9. January, February, March, April, May, June, July, August, September, October, November, December

10.

| | |
|-----------------------------------|-----------|
| Last month of the year | December |
| Month after June | July |
| Month having least number of days | February |
| Month before October | September |
| First month of the year | January |

11. (b)

12.



13. (c)

14. (c)

15. Wednesday