

CITIVUS

Perimeter and Area, and Data Handling

WORKSHEET 5

Theme	Perimeter and Area, and Data Handling
Question 1	<p>A boy ran along the entire boundary of a rectangular park. He covered a total distance of 1 km. What is the perimeter of the park?</p> <ul style="list-style-type: none">• 300 m• 400 m• 600 m• 1000 m
Question 2	<p>The length of the boundary of a square park is 200 m. What is the area of the park?</p> <ul style="list-style-type: none">• 200 sq. m• 800 sq. m• 2500 sq. m• 5000 sq. m
Question 3	<p>One side of a triangle is 24 cm. What is the perimeter of the triangle, if all its sides are equal in length?</p> <ul style="list-style-type: none">• 96 cm• 120 cm• 72 cm• 192 cm

Question 4	<p>The length of a rectangle is twice its breadth. The perimeter of the rectangle is 1200 sq. cm. What is the length of the rectangle?</p> <ul style="list-style-type: none"> • 100 cm • 200 cm • 300 cm • 400 cm
Question 5	<p>A square and a rectangle have equal area. The area of the square is 400 cm^2. What is the breadth of the rectangle, if the length of the rectangle is 40 cm?</p> <ul style="list-style-type: none"> • 10 cm • 20 cm • 30 cm • 40 cm
Question 6	<p>There is a rectangular board of dimensions $15 \text{ m} \times 10 \text{ m}$. The cost of painting the board is ₹ 15 per sq. m. What is the cost of painting the board?</p> <ul style="list-style-type: none"> • ₹ 150 • ₹ 500 • ₹ 1,500 • ₹ 2,250





Question 7 The length of a rectangle is 15 m and the breadth is 5 cm less than the length. What is the area of the rectangle?

- 45 sq. m
- 75 sq. m
- 100 sq. m
- 150 sq. m

Question 8 Data can be represented by _____.

- numbers only
- symbols only
- graphs only
- all of the above

Question 9 A pictograph given below represents the favourite subject of some children of class 2, 3 and 4.

Subject	Number of children
Mathematics	
English	
Science	
Hindi	


Key  represent 10 children and  represents 5 children

How many more children like Science than Hindi?

- 10
- 15
- 20
- 25

Question 10

The bar graph given alongside shows the favourite subject of children



How many children do not consider Science as their favourite subject?

- 10
- 3
- 6
- 4

- x -

Answers

Answer 1	1000 m
Answer 2	2500 sq. m
Answer 3	72 cm
Answer 4	400 cm
Answer 5	10 cm
Answer 6	₹ 2,250
Answer 7	150 sq. m
Answer 8	all of the above
Answer 9	15
Answer 10	10

- x -